

STRUCTURAL ANALYSIS-II

May 2012

Paper Code: CE-202 - F

Note: Attempt any five questions. All questions carry equal marks.

Q.1.(a) Determine the vertical deflection at free end C of the beam ABC shown in fig.(i). Consider $E = 2 \times 10^5 \text{ N/mm}^2$ and $I = 8 \times 10^8 \text{ mm}^4$. (10)

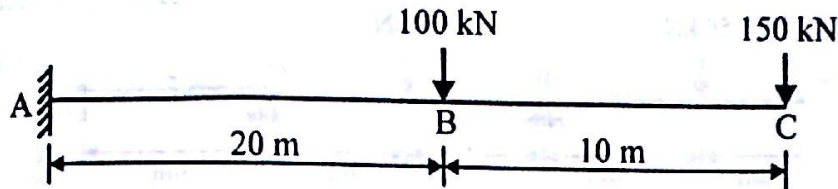


Fig. : (1)

Q.1.(b) Find Static and Kinematics Indeterminacies for the following structures. (10)

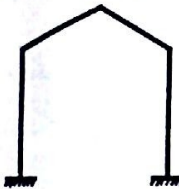


Fig. : (2)

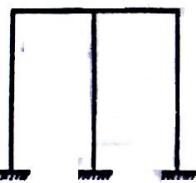


Fig. : (3)

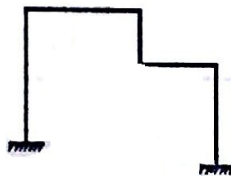


Fig. : (4)



Fig. : (5)

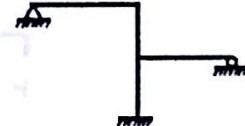


Fig. : (6)

Q.2.(a) A parabolic arch is hinged at the ends, which are at the same level. The span is 50 meter with a central rise of 8 meters. It carries a point load of 180 kN at the crown. Calculate the normal thrust, radial shear and bending moment at the left hand quarter point. (10)

Q.2.(b) A two-hinged parabolic arch has span of 60m and carries uniformly distributed load of 6 kN/m on left hand half of the span and also a point load of 60 kN at the crown. Determine the horizontal thrust at the supports and the maximum positive and negative B.M. (10)

Q.3.(a) A suspension bridge 130 meter span has two three hinged stiffening girders supported by two cables having a central dip of 8.5 meters. The width of the roadway is 6 meter. The dead load is 20 kN/m² of floor area and a live load of 30 kN/m² covers the left hand half of the bridge. Find the S.F. and B.M. at the 30 meter from left point. Also, determine the maximum tension in the cables. (10)

Q.3.(b) A foot bridge, 8 meter wide is carried over a river by a suspension bridge of 80 meter span, by two cables of uniform section having a central dip of 6 meters. If the platform load is 10 kN/m² calculate the maximum pull in the cables, their sectional area and length, if the permissible stress in the cables is 140 MN/m² and the specific weight of the cable is 76.5 kN/m³. (10)

Q.4. Determine the support moments at A, B, C and D for the continuous girder shown in figure below by moment distribution method. Also draw S.F. and B.M. diagrams. (20)

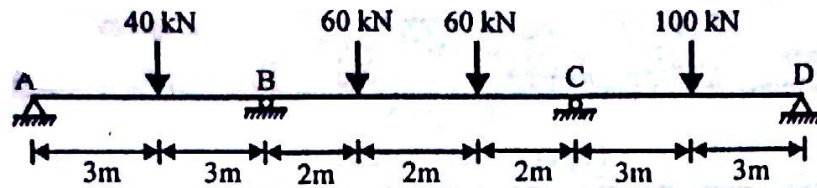


Fig. : (7)

Q.5. Determine the end moments for the beam by moment distribution method. Consider EI constant. Also draw S.F. and B.M. diagrams. (20)

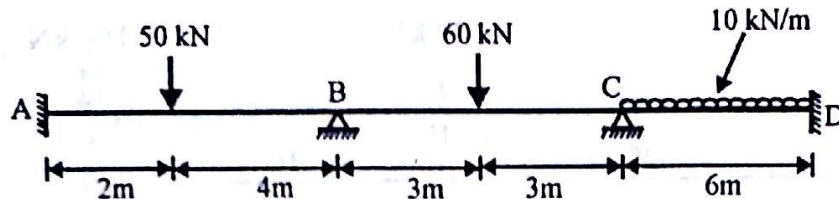


Fig. : (8)

Q.6. Determine the fixed end moments for the fixed beam by column analogy method. Consider EI constant. (20)

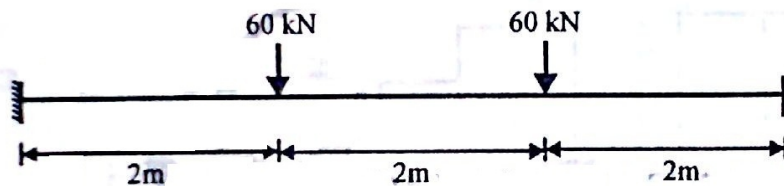


Fig. : (9)

Q.7. A $100 \times 100 \times 20$ mm angle section used as a simply supported beam over a span of 2.5 m. It carries a load of 500 N along the line YG, where G is the centroid of the section. Calculate : (20)

- Stresses at the points A, B, and C of the mid section of the beam.
- Deflection of the beam at mid section and its direction with the load line.
- Position of the neutral axis.

Take $E = 200 \text{ GN/m}^2$

Q.8. State the following : (20)

- Define statics and kinematics indeterminacies.
- State Castigliano's First & Second Theorem.
- Define Two-Hinged Arch.
- Define Carryover moment.
- What is the use of Influence Line Diagrams?
- What is the equation of length for cable?
- Define flexibility and stiffness coefficients.
- List Advantages and disadvantages of continuous beam.
- Explain disadvantages of continuous beam.
- What is strain energy?

